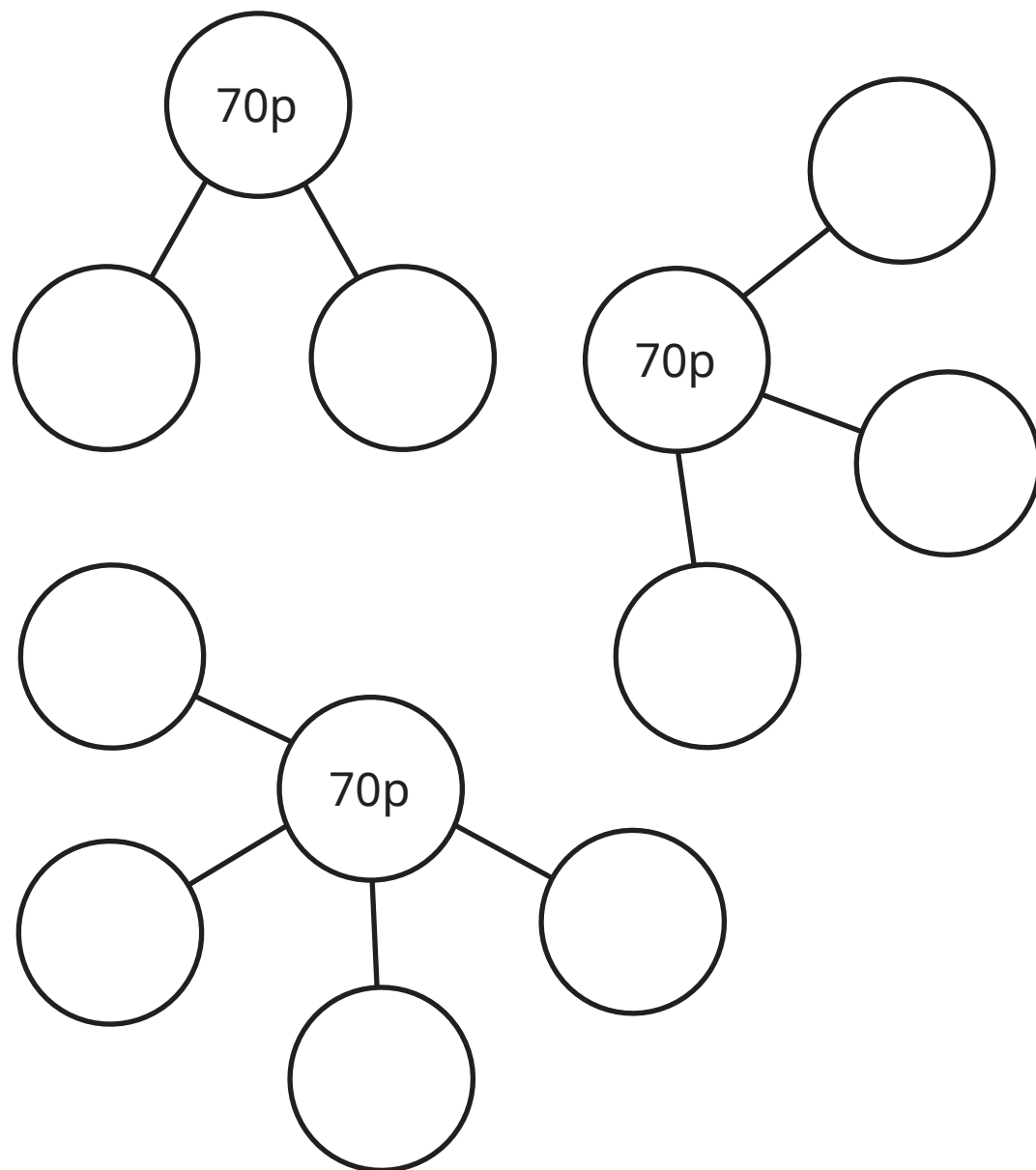


Make the same amount



1 Kim is making 70p in different ways.

a) Complete the part-whole models to show the coins Kim can use.





b) Can you make 70p in any other ways?
Talk about it with a partner.

2 Match the amounts.




3 Match the amounts.



4

I have £30
in notes.



a) What notes could Ron have?

b) What is the fewest number of
notes Ron could have?

Which notes are they?

c) What is the greatest number of
notes Ron could have?

Which notes are they?

5 Show £4 and 51p in two different ways.



6

Mo, Sam and Kim each have some money.

a)




Mo

I have two
20p coins and
four 10p coins.

How much money does Mo have?

 p

b)




Sam

I have the same
amount of money as Mo,
but only three coins.

Draw Sam's coins.

c)

I have the
same coins as Sam and
I have two notes.



Kim

How much money could Kim have?

£ and p

Compare answers with a partner.

