
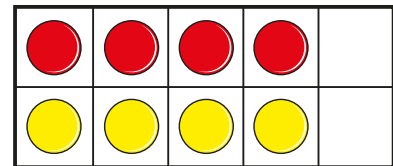


1 Max is working out doubles and near doubles.

a)



I have shown
double 4



Complete the sentences.

Double 4 is

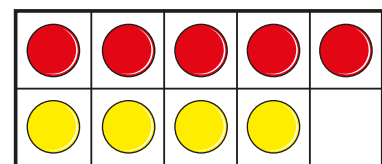
+

=

b)



I can use
double 4 to
work out $5 + 4$



Complete the sentences.

$5 + 4 =$

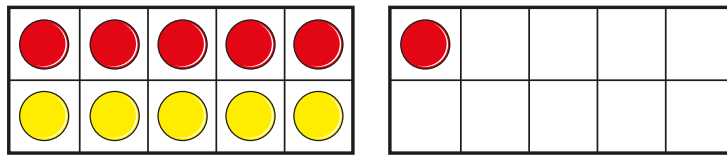
$5 + 4$ is equal to double

plus 1

2

Complete the sentences to work out the near doubles.

a)

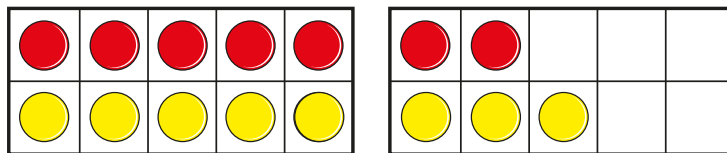


6 + 5 is equal to double

plus

$$6 + 5 =$$

b)

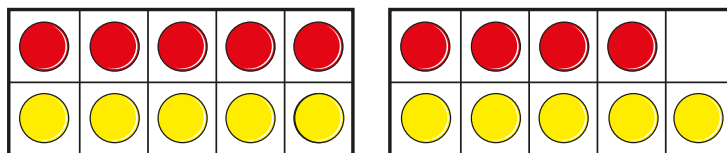


7 + 8 is equal to double

plus

$$7 + 8 =$$

c)



9 + 10 is equal to double


plus

+

=




3 Jo and Sam are working out $4 + 5$



Jo

I know that
double 4 is 8

I know that
double 5 is 10



Sam

a) Use Jo's fact to work out $4 + 5$

$$4 + 5 =$$

b) Use Sam's fact to work out $4 + 5$

$$4 + 5 =$$